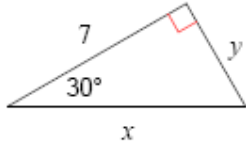


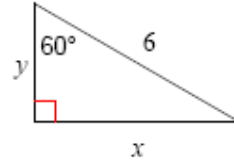
Geometry Review
Special Right Triangles

Find the missing side lengths. Leave your answers as radicals in simplest form.

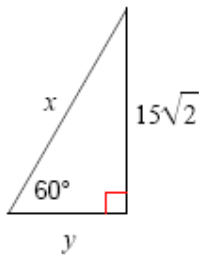
1)



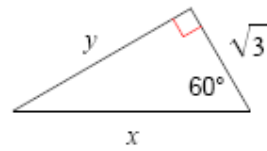
2)



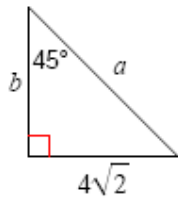
3)



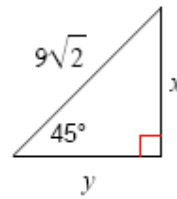
4)



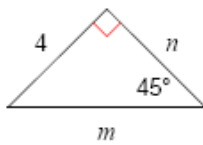
5)



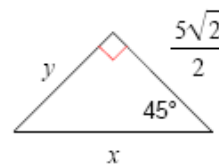
6)



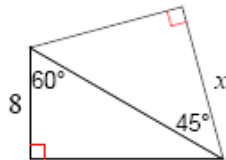
7)



8)



9)



10)

